

Nom

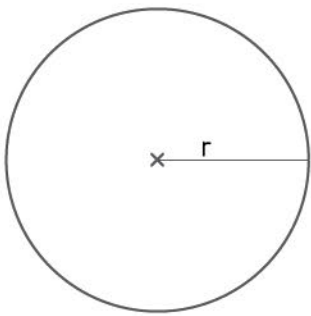
Date

» LA GEOMETRIE

Ecris les formules des figures ci-dessous:



Disque



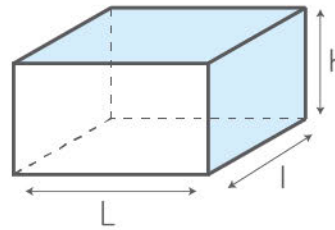
Périmètre :

$P =$

Surface :

$A =$

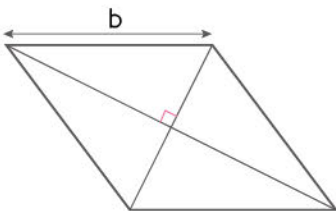
Pavé



Volume :

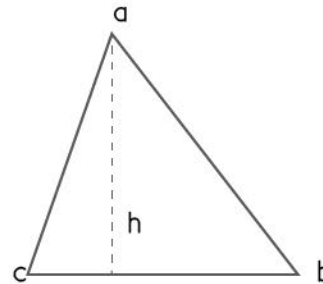
$V =$

Losange



Périmètre :

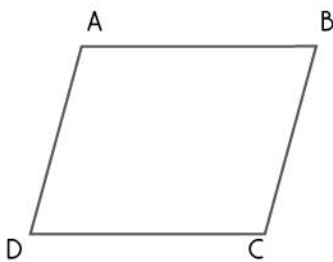
Triangle



Périmètre :

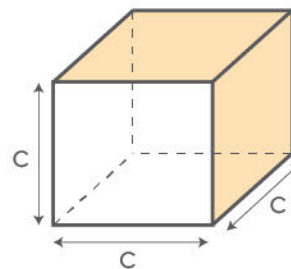
Surface :

Parallélogramme



Périmètre :

Cube



Volume :

Surface :